

Name:
Instructor:

Date:
Section:

Practice Set 5.6

Use the choices to fill in each blank.

$a^3 - b^3$	factored	sum	$(a + b)^2$
$a^3 + b^3$	added	difference	$(a - b)^2$

- The sum of two squares, $a^2 + b^2$, cannot be _____ over the real numbers.
- The _____ of two cubes formula states _____ = $(a - b)(a^2 + ab + b^2)$.
- The _____ of two cubes formula states _____ = $(a + b)(a^2 - ab + b^2)$.
- A perfect square trinomial factors as follows: $a^2 + 2ab + b^2 =$ _____.
- A perfect square trinomial factors as follows: $a^2 - 2ab + b^2 =$ _____.

Use the difference of two squares formula and the perfect square trinomial formula to factor each polynomial.

- | | | |
|---------------------------------------|--|-----------|
| 6. $x^2 - 49$ | 7. $36x^6 - 49y^2$ | 6. _____ |
| | | 7. _____ |
| 8. $3x^6 - 75y^4$ | 9. $(y - 3)^2 - 16$ | 8. _____ |
| | | 9. _____ |
| 10. $9 - 16y^4$ | 11. $x^2y^2 - 144z^2$ | 10. _____ |
| | | 11. _____ |
| 12. $\frac{1}{81}x^2 - \frac{1}{100}$ | 13. $\frac{4}{9}x^2y^2z^2 - \frac{36}{49}$ | 12. _____ |
| | | 13. _____ |
| 14. $x^2 - 14x + 49$ | 15. $x^2 - 12x + 36$ | 14. _____ |
| | | 15. _____ |
| 16. $9x^4 - 42x^2 + 49$ | 17. $16x^2 - 40xy + 25y^2$ | 16. _____ |
| | | 17. _____ |
| 18. $(a + b)^2 + 14(a + b) + 49$ | 19. $(x - y)^2 + 18(x - y) + 81$ | 18. _____ |
| | | 19. _____ |
| 20. $x^2 - 10x + 25 - y^2$ | 21. $4a^4 - 20a^2b + 25b^2 - 9$ | 20. _____ |
| | | 21. _____ |

Factor using the sum or difference of two cubes formula.

- | | | |
|----------------|---------------------|-----------|
| 22. $x^3 - 27$ | 23. $8x^3 + 125y^6$ | 22. _____ |
|----------------|---------------------|-----------|

Practice Set 5.6

24. $81 - 3x^3$

25. $16x^6 - 54y^3$

26. $w^3 - 343$

27. $y^6 + 729$

28. $(x - 1)^3 - 27$

29. $(y + 3)^3 + 8$

23. _____

24. _____

25. _____

26. _____

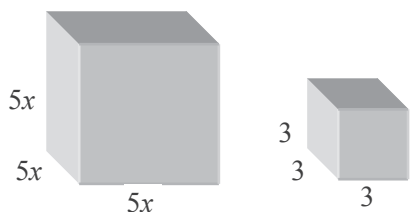
27. _____

28. _____

29. _____

Find an expression, in factored form, for the difference of the volumes of the two cubes.

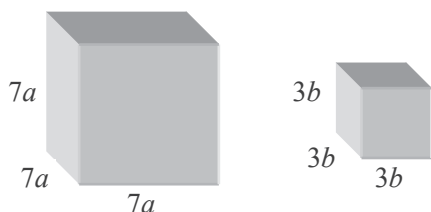
30.



30. _____

Find an expression, in factored form, for the sum of the volumes of the two cubes.

31.



31. _____


Write an expression, in factored form, for the volume of the shaded ring.

32. $V = \pi r^2 h$

a = radius of outside circle

b = radius of inside circle

c = height of cylinder



32. _____